

NAME: _____

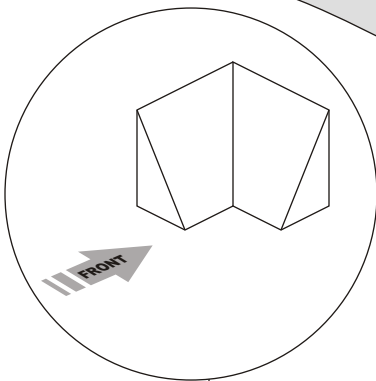
SCORE: _____

FRONT VIEWS

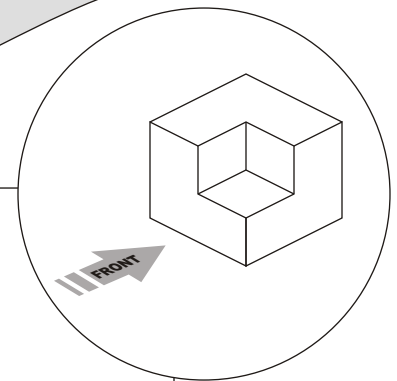
DIRECTIONS: Look at each of the Isometric Shapes and sketch the front view of each shape in the spaces provided.

This extra credit activity is worth 20 points.

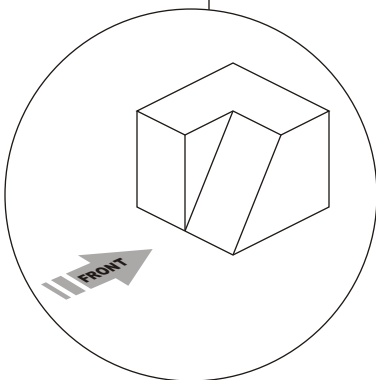
- EXTRA CREDIT - #4



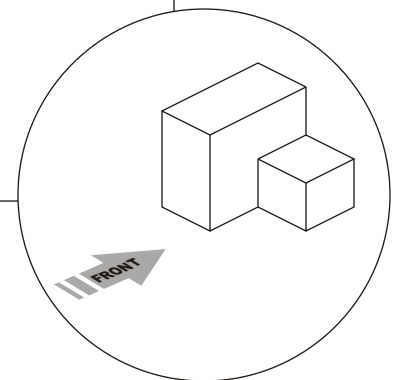
Blank space for sketching the front view of the triangular prism.



Blank space for sketching the front view of the rectangular prism.



Blank space for sketching the front view of the cut rectangular prism.



Blank space for sketching the front view of the two rectangular prisms.